



CREST Mental Maths Olympiad (CMMO)

Sample Paper

Pattern and Marking Scheme

Grade	Topic/Section	No. of Questions	Marks per Question	Total Marks
Grade 7	Basique	80	3	240
	Avance	20	6	120
Grand Total		100		360

The total duration of the exam is 60 minutes.

Note: For every incorrect answer, there's a penalty of $\frac{1}{3}$ rd of the total marks allotted to that question.

Syllabus

Number System

- Integers
- Rational number and its properties

Algebra

- Algebraic expressions
- Simple equations

Square and Square Roots

- Square of a number
- Square roots
- Square roots of decimals

Cube and Cube Roots

- Cube of a number
- Cube roots

Comparing Quantities

- a. Ratio and proportion
- b. Percentage
- c. Profit and loss
- d. Simple interest
- e. Compound interest
- f. Problems on ages
- g. Time and work
- h. Average
- i. Partnership
- j. Time and distance

Mensuration

- a. Area of Shapes (Trapezium, General quadrilateral & Circle)
- b. Surface area of cube
- c. Surface area of cuboid
- d. Surface area of cylinder
- e. Surface area of cone, etc.
- f. Volume of cube
- g. Volume of cuboid
- h. Volume of cylinder
- i. Volume of cone, etc.

Playing with Numbers

- a. Exponents
- b. Mathematical reasoning
- c. Tests of divisibility
- d. H.C.F and L.C.M
- e. Numbers pattern

Data Handling and Symmetry

- a. Bar graph
- b. Line graph
- c. Symmetry

Geometry

- a. Lines and angles

For more details, visit <https://www.crestolympiads.com/mental-maths-mmo>

Basique (Each Question is 3 Marks)

1. What is the measurement of the side of a square coffee table that has an area of 196 inches²?
 - a. 12 inches
 - b. 14 inches
 - c. 16 inches
 - d. 18 inches
2. What is the length of one side of a square desktop with an area of 324 square inches?
 - a. 18 inches
 - b. 20 inches
 - c. 22 inches
 - d. 24 inches
3. What is the cube root of 729?
 - a. 7
 - b. 8
 - c. 9
 - d. 11
4. In a certain school, there are 240 boys and 360 girls. What is the ratio of boys to girls?
 - a. 1 : 3
 - b. 2 : 3
 - c. 3 : 4
 - d. 1 : 2
5. After starting to write 24 pages, Ashu completed 25% of his work by evening. How many pages does he still need to write?
 - a. 12 pages
 - b. 14 pages
 - c. 16 pages
 - d. 18 pages
6. What will come in place of question mark (?) in the number series?
8, 9, 20, 63, 256, 1285, ?
 - a. 7345
 - b. 7456
 - c. 7716
 - d. 7834
7. What is the average of 122, 128, 146, 124, 136, 142?
 - a. 128
 - b. 133
 - c. 139
 - d. 145
8. A car is traveling at a speed of 50 km/h. How long will it take to cover a distance of 400 km?
 - a. 6 hours
 - b. 7 hours
 - c. 8 hours
 - d. 9 hours

9. A jeep has wheels of diameter 140 m. How many revolutions can the wheel complete in 40 minutes if the jeep is travelling at a speed of 220 m/s?
- a. 1200
b. 1300
c. 1400
d. 1500
10. A wall clock has its minute hand of length 21 cm. What area will it swept in covering 30 minutes?
- a. 678 cm^2
b. 693 cm^2
c. 711 cm^2
d. 727 cm^2
11. Simplify: $12 \times 12^2 - 3^2$
- a. 136
b. -1367
c. 1687
d. 1719
12. Solve: $(9 + 4)^2 + 6^5 / 36^2$
- a. 175
b. 185
c. 1187
d. 1346
13. Solve: $9^3 \times 9 + 11^7 / 11^4$
- a. 6860
b. 7892
c. 8142
d. 9273
14. If the ratio of two numbers A and B is 5 : 6 and their LCM is 480, what is their HCF?
- a. 12
b. 14
c. 16
d. 18
15. If the supplement of an angle is equal to three times its complement, what is the measure of the angle?
- a. 45°
b. 50°
c. 55°
d. 60°
16. Find a rational number between $2/3$ and $3/4$.
- a. $87/110$
b. $91/110$
c. $87/120$
d. $91/120$
17. Find a rational number between $-3/4$ and $5/6$.
- a. $6/24$
b. $5/28$
c. $9/29$
d. $2/5$

18. Form an equation:

5 added to twice a number is 135.

a. $2x + 135 = 5$

b. $2x + 5 = 135$

c. $5x + 135 = 2$

d. $2x = 5 + 135$

19. Identify the coefficients of $3x^2$ in the algebraic expression:

$3x^2 - 2zy$

a. $3 - 2z$

b. $3x^2$

c. $-2zy$

d. $3 - 2zy$

20. If $x = 3$ and $y = 5$, find $x^2 + y^2$.

a. 34

b. 36

c. 29

d. 30

21. Find the value of m :

$24(m + 12) = 144$

a. 8

b. -8

c. 6

d. -6

22. John's father's age is 5 years more than three times John's age. Find John's age, if his father is 44 years old.

a. 14

b. 12

c. 13

d. 16

23. Find: $\sqrt[3]{729}$

a. 0.3

b. -0.03

c. -0.09

d. -0.9

24. Solve: $(8 \times 16)^3$

a. 2^{21}

b. 2^{23}

c. 2^{22}

d. 2^{19}

25. Solve: $(0.3)^3$

a. 0.027

b. 0.09

c. 0.00027

d. 0.27

26. Which of the following numbers are not a perfect cube?

a. 216

b. 512

c. 1331

d. 1521

27. Solve: $11^3 + (-8^3)$

- a. 719
- b. 819
- c. 619
- d. 919

28. The cost of 6 pens is \$72. What would be the cost of 10 such pens?

- a. \$130
- b. \$120
- c. \$140
- d. \$90

29. In a mixture of 60 L, the ratio of milk and water is 7 : 3. How many litres of milk are there in the mixture?

- a. 20 L
- b. 36 L
- c. 6 L
- d. 42 L

30. How many boys are there in the class if there are 40 students and 70% of them are girls?

- a. 12
- b. 14
- c. 16
- d. 10

31. A and B invest in a business in the ratio of 3 : 5. How much does A invest if B invests \$12,000?

- a. \$7,550
- b. \$7,200
- c. \$7,000
- d. \$7,050

32. Two people invested \$15000 and \$25000 respectively to start a business. They decided to share the profits in the ratio of their investments. If their profit is \$12000, how much does 2nd person get?

- a. \$7,500
- b. \$7,550
- c. \$7,600
- d. \$7,450

33. A train travels a distance of 360 km at a speed of 60 km/h. How much time does the train need to travel this distance?

- a. 3 hrs
- b. 4 hrs
- c. 5 hrs
- d. 6 hrs

34. A shopkeeper bought a watch for \$40 and sold it for \$60. What is his profit?

- a. \$62
- b. \$14
- c. \$36
- d. \$20

50. What is the surface area of a cylinder with a height of 7 cm and a diameter of 10 cm?

- a. 372 cm^2
- b. 379 cm^2
- c. 377 cm^2
- d. 370 cm^2

51. What is the surface area of a sphere with a radius of 5 cm (approx.)?

- a. 312 cm^2
- b. 318 cm^2
- c. 314 cm^2
- d. 320 cm^2

52. Find the volume of a hemisphere with a radius of 5 cm (approx.).

- a. 262 cm^3
- b. 242 cm^3
- c. 226 cm^3
- d. 224 cm^3

53. Find the height of the cylinder whose volume is 275 cm^3 and base area is 25 cm^2 .

- a. 15 cm
- b. 11 cm
- c. 13 cm
- d. 16 cm

54. Which two signs should to interchanged to make the equation below true?

$$21 \div 3 \times 2 - 8 + 5 = 8$$

- a. - and +
- b. x and /
- c. / and +
- d. - and /

55. If $11 \times 13 \times 15 = 246$, $16 \times 17 \times 18 = 789$, then $22 \times 23 \times 24 = ?$

- a. 465
- b. 432
- c. 234
- d. 345

56. Find the missing number.

	4	5	
7	45	59	8
10	?	75	9
	7	6	

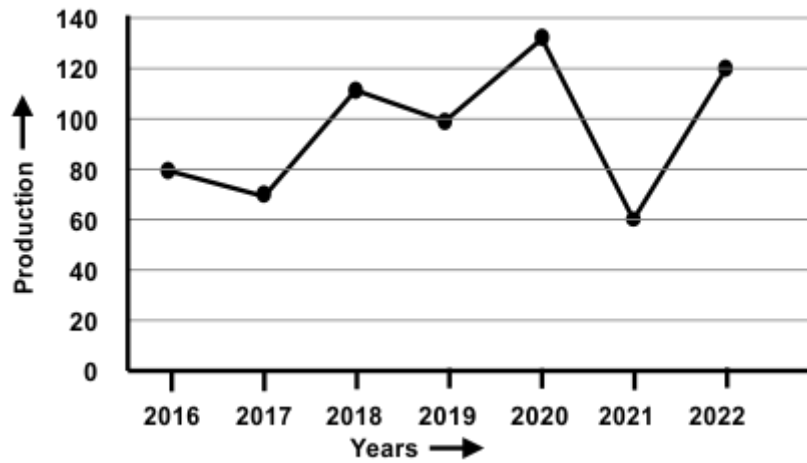
- a. 90
- b. 91
- c. 93
- d. 95

57. Which number is divisible by 11?

82513, 42165, 12547, 34255, 86394

- a. 12547
- b. 86394
- c. 82513
- d. 34255

63. The line shows the annual food grain production from 2016 to 2022. Refer to the graph & answer the question based on line graph as given below.
Which year's production, on average, was equivalent to that of 2019 and 2021?



- a. 2016
b. 2017
c. 2019
d. 2018
64. Find the number of lines of symmetry in the given figure.

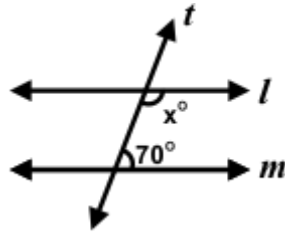


- a. 2
b. 3
c. 4
d. 1
65. In the given figure, find the order of rotational symmetry.



- a. One
b. Two
c. Four
d. Six
66. Two supplementary angles are in the ratio 3 : 7, find the angles.
- a. 52, 121
b. 42, 128
c. 54, 126
d. 48, 132

67. $l \parallel m$ and t is a transversal, find x .



- a. 120°
- b. 124°
- c. 138°
- d. 110°

68. Subtract: $(-6 \times 12 + 13) - (10 \times 13 - 23)$

- a. 166
- b. -166
- c. 107
- d. -59

69. Solve: $(-8) * [(-2) + 7] = \underline{\hspace{2cm}}$

- a. -16
- b. -72
- c. -20
- d. -40

70. Solve: $(-11) * (-47) + (-23) * (-10)$

- a. 647
- b. -747
- c. 747
- d. -647

71. Fill in the blank:

$$(-45) + (-42) = (-42) + \underline{\hspace{2cm}}$$

- a. -45
- b. 45
- c. 87
- d. -87

72. Solve: $\frac{3}{7} + (-\frac{6}{11}) + (-\frac{8}{21}) + (\frac{5}{22})$

- a. $-\frac{135}{362}$
- b. $\frac{125}{362}$
- c. $-\frac{125}{462}$
- d. $\frac{135}{462}$

73. Ramsin camera was loaded with a new roll of film. The film can take 36 snaps. During the class picnic, he took 20 pictures. What fraction of the roll can still be used to take snaps?

- a. $\frac{2}{3}$
- b. $\frac{5}{9}$
- c. $\frac{14}{5}$
- d. $\frac{8}{7}$

74. A designer needs $\frac{3}{5}$ th of a metre of cloth to make a fancy dress for children taking part in a dance performance. If 200 children are taking part, how much cloth will the designer need?

- a. 180
- b. 200
- c. 1400
- d. 120

75. Solve:

$$0.3 \times 3\frac{1}{3} = \underline{\quad}$$

- a. 12
c. 3
- b. 5
d. 1

76. Find: $(11^2) - (9^2) + (18^2)$

- a. 342
c. 324
- b. 364
d. 346

77. Find: $(4^2)^2 - 17 \cdot 8 + 14^2$

- a. 392
c. 256
- b. 342
d. 316

78. What is the missing digit in $(37)^2 = 136?$

- a. 8
c. 7
- b. 9
d. 4

79. Find the square root of 17.64.

- a. 3.2
c. 4.4
- b. 4.2
d. 3.5

80. Find: $\sqrt{1024} - \sqrt{900}$

- a. 2
c. 3
- b. 6
d. 4

Avance (Each Question is 6 Marks)

81. The diameter of the driving wheel of a lorry is 95 cm. How many revolution per minute must the wheel make in order to keep a speed of 75 km/h approximately?

- a. 201
c. 209
- b. 204
d. 215

82. $(52)^{x-3} = ((5)^3)^{123}$ find value of x.

- a. 1
c. 3
- b. 2
d. 4

83. Write the expression for the following:

A man has \$ x with him. He gave half to his wife, $\frac{1}{3}$ rd to his son and rest of \$1500 to his daughter.

a. $\frac{x}{3} + \frac{x}{3} + 1500 = \frac{x}{3}$

b. $\frac{x}{3} + \frac{x}{2} + 1500 = \frac{x}{3}$

c. $\frac{x}{2} + \frac{x}{3} + 1500 = x$

d. $\frac{x}{3} + \frac{x}{2} + 1500 = \frac{x}{2}$

84. What should be added to twice the rational number $-\frac{7}{3}$ to get $\frac{3}{7}$?

a. $\frac{21}{21}$

b. $\frac{101}{21}$

c. $\frac{110}{21}$

d. $\frac{107}{21}$

85. Find the cube root of 13824.

a. 22

b. 26

c. 24

d. 23

86. A bicycle travels a distance of 20 km in 1 hour. How long will it take to travel a distance of 80 km at the same speed?

a. 7 hrs

b. 3 hrs

c. 4 hrs

d. 1 hrs

87. If a shirt costs \$30 and is on sale for 20% off, how much does it cost?

a. \$37

b. \$35

c. \$24

d. \$77

88. A book costs \$20 and is on sale for 25% off. How much will the book cost during the sale?

a. \$14

b. \$34

c. \$15

d. \$16

89. What is the compound interest on a principal of \$10,000 at a rate of 8% per annum for 3 years, compounded annually?

a. \$2,199

b. \$2,179.82

c. \$2,590.25

d. \$2,597.12

90. The average marks obtained by 125 students in an exam is 29. If the average marks of passed students is 36 and that of failed students is 11. Find the number of failed students.

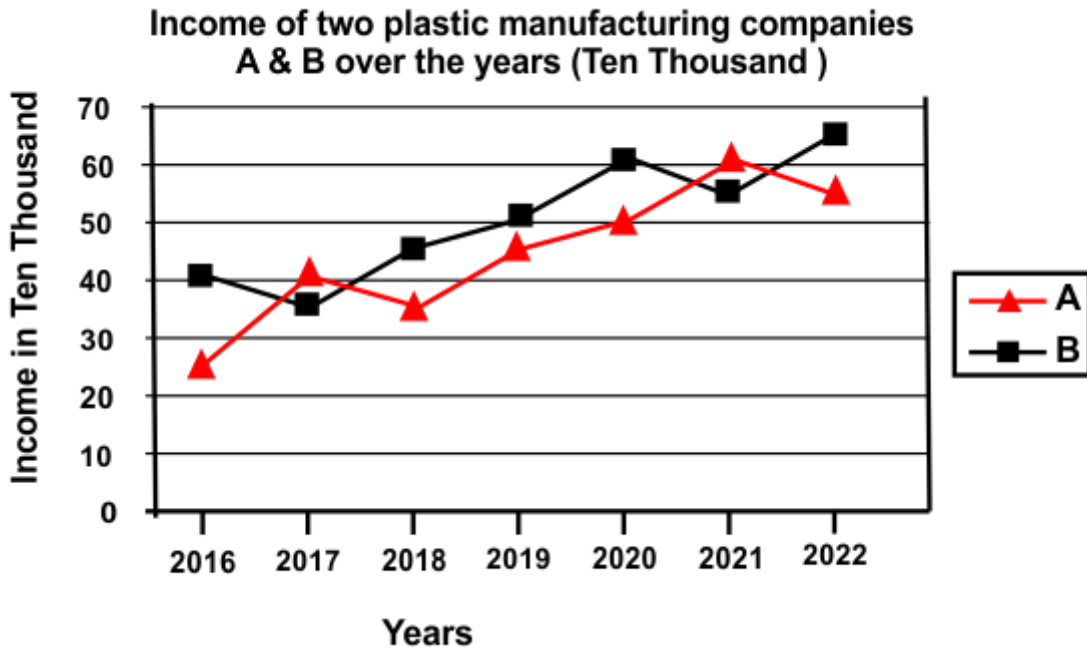
a. 67

b. 55

c. 96

d. 35

96. Study the graph carefully and answer the question given below (Profit is taken as the % of expenditure.)
 What would be the ratio of Company B's 2020 income to that of Company A's 2017 income?



- a. 3 : 5
 b. 4 : 5
 c. 2 : 3
 d. 3 : 2
97. How many lines of symmetry are there in the given figure?
- a. three
 b. two
 c. one
 d. none
98. Read the histogram and answer the questions.
- a. What is the number of students in the marks group of 50–60?
 b. In which group the number of students are maximum?
- a. a – 10, b – 40-50
 b. a – 8, b – 60-70
 c. a – 8, b – 10-20
 d. a – 5, b – 60-70
99. A lift descends into a mine shaft at the rate of 6 m/min. If the descent starts from 10 m above the ground level, how long will it take to reach -350 m?
- a. 2 hrs
 b. 3 hrs
 c. 4 hrs
 d. 1 hr
100. Find the least number that must be subtracted from 5607 so as to get a perfect square.
- a. 166
 b. 156
 c. 131
 d. 143

Answer Key

1.	b	2.	a	3.	c	4.	b	5.	d	6.	c	7.	b
8.	c	9.	a	10.	b	11.	d	12.	a	13.	b	14.	a
15.	a	16.	c	17.	a	18.	b	19.	c	20.	a	21.	d
22.	c	23.	d	24.	a	25.	a	26.	d	27.	b	28.	b
29.	d	30.	a	31.	b	32.	a	33.	d	34.	d	35.	a
36.	b	37.	a	38.	d	39.	c	40.	b	41.	a	42.	c
43.	c	44.	b	45.	c	46.	d	47.	d	48.	c	49.	b
50.	c	51.	c	52.	a	53.	b	54.	c	55.	d	56.	c
57.	b	58.	b	59.	d	60.	d	61.	c	62.	b	63.	a
64.	b	65.	b	66.	c	67.	d	68.	b	69.	d	70.	c
71.	a	72.	c	73.	b	74.	d	75.	d	76.	b	77.	d
78.	b	79.	b	80.	a	81.	c	82.	c	83.	c	84.	d
85.	c	86.	c	87.	c	88.	c	89.	d	90.	d	91.	a
92.	d	93.	d	94.	a	95.	a	96.	d	97.	d	98.	d
99.	d	100.	c										