



## CREST Science Olympiad (CSO)

# Sample Paper

## Pattern and Marking Scheme

Grade	Topic/Section	No. of Questions	Marks per Question	Total Marks
Grade KG	Practical Science	20	1	20
	Achiever's Section	5	2	10
<b>Grand Total</b>		<b>25</b>		<b>30</b>

The total duration of the exam is 60 minutes.

## Syllabus

**Section1:** Myself (My Body Parts, Sense Organs, My Family, My Home, My School, My Food, My Clothes)

My Environment (Seasons: Summer, Winter, Rainy, Air, Water and Noise Pollution)

Animals, Bird, Insects (Wild, Domestic and Pet Animals, Farm Animals, Water Animals, Animal Sounds, Young Ones and Homes)

Plants (Fruits, Vegetables and Flowers)

Music and Games (Musical Instruments, Indoor and Outdoor Games)

Transport, Safety and Habits (Transport: Road, Rail, Water, Air, Traffic Rules and Safety, Good and Bad Habits)

**Achievers Section:** Higher Order Thinking Questions - Syllabus as per Section 1

For more details, visit <https://www.crestolympiads.com/science-olympiad-cso>

## Practical Science (Each Question is 1 Mark)

1. Identify the 'guitar':

a.



b.



2. Identify the fruit whose name starts with 'B':

a.



b.



3. What we wear on head in winter season?

a.



b.



4. Which food is healthy?

a.



b.



5. Identify the vehicle:

a. Car



b. Bus

6. Identify the means of air transport:

a.



b.



7. Select the one who lives in water:

a.



b.



8. Which is the coldest season of the year?



a. Winter

b. Summer


9. We should cross the road, when the pedestrian crossing signal is:



a.



b.



10. Select the indoor game:

a.



b.



11. Which type of clothes are worn in rainy season?



a.



b.



12. Select the vegetable from the given images:



13. Identify the animal:



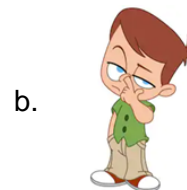
a. Elephant

b. Zebra

14. We walk with our \_\_\_\_\_.



15. Identify the good habit:



16. Identify the type of animal:



a. Pet animal

b. Farm animal

17. Identify the bad habit:



18. My father's mother is my \_\_\_\_\_.

a.



grandmother

b.



aunt

19. What comes out at night?

c.



Sun

d.



Moon

20. Where do children go to study?

a.



b.



## Achiever's Section (Each Question is 2 Marks)

21. Which one is a farm animal?

a.



b.



22. Identify the lotus:

a.



b.



