



ISSO
International Social Studies
Olympiad



Presented by:
SILVER ZONE
ISO 9001: 2000 Certified

Organized by:
Society of Science Education
New Delhi, India

**SILVER
ZONE**
FOUNDATION
NEW DELHI - INDIA

CLASS : 4 SAMPLE QUESTIONS

The Actual Question Paper Contains 50 Questions. The Duration of the Test Paper is 60 Minutes.

- Which of the following is NOT true?**



(A) More than 3,000 varieties of rice are cultivated in India.



(B) Lightning is one of the sources which provides nitrogen to soil.

(C) Laterite soil develops as a result of leaching in areas with high temperature and high rainfall.

(D) Commonly used resources are known as non conventional resources.

(E) None of these
- Which of the following symbols represents the National Airlines of India?**

(A)  (B) 

(C)  (D) 

(E) None of these
- Suppose, one night while sleeping a river appeared in your dream and challenged you with following words:**

'I am Jamuna in Bangladesh, Tsangpo in Tibet and Yalu Zangbu in China. Can you recognise me?'

What will be your answer?

(A) You are the Yamuna river.

(B) You are the Ganga river.

(C) You are the Brahmaputra river.

(D) You are the Narmada river.

(E) None of these
- In which of the following one third of all seats are reserved for women?**

(A) Panchayats

(B) Municipalities

(C) Municipal Corporations

(D) All of these

(E) None of these
- Your father promised to take you to a shipbuilding yard during summer vacation. Which of the following places you might be visiting for the purpose?**

(A) Bengaluru

(B) Gurgaon

(C) Pune

(D) Marmagao

(E) None of these
- The Mettur Dam built on the _____ river is the largest irrigation project in South India.**

(A) Godavari (B) Kaveri





(C) Krishna (D) Narmada

(E) None of these

7. Match the following:

- a. Koli i. Traditional dress of women in Assam
 b. Bhadrachalam ii. Special dish of Madhya Pradesh
 c. Mekhela iii. A pilgrimage town in Telengana
 d. Bhutte-ki-kees iv. Folk dance of Maharashtra
- (A) a-ii; b-iv; c-i; d-iii (B) a-i; b-ii; c-iii; d-iv
 (C) a-iv; b-iii; c-i; d-ii (D) a-iii; b-ii; c-iv; d-i
 (E) None of these

8. Who among the following is referred as the Missile Man of India ?

- (A)  (B) 
 (C)  (D) 
 (E) None of these

9. What do you understand by 'Mango Showers'?

- (A) Heavy monsoon rain in Maharashtra
 (B) Excessive harvest of mangoes in West Bengal
 (C) Retreating monsoon rain in Tamil Nadu
 (D) Pre-monsoon rain in Kerala
 (E) None of these

10. Find the odd one out.

- (A) Rajaji (B) Guindy
 (C) Simlipal (D) Keibul Lamjao
 (E) None of these

11. Which of the following words had been added to the Indian Constitution by 42nd Amendment in 1976?

- (A) Democratic and Republic

- (B) Sovereign and Socialist
 (C) Sovereign and Secular
 (D) Socialist and Secular
 (E) None of these

12. If you are asked to travel from Varansi to Kanyakumari by road, for which of the following National Highways you would have to go?

- (A) NH-7 (B) NH-8
 (C) NH-10 (D) NH-1
 (E) None of these

13. You along with your family members are shopping in a mall during Diwali festival. Suddenly you notice that a gang of masked men, with pistols in their hands, enter a shop and try to rob. Which of the following number will you call for help?

- (A) 102 (B) 101
 (C) 100 (D) 110
 (E) None of these

14. Which of the following is correct?

- (A) Hematite is an ore of aluminum.
 (B) Internet provides facilities for money transaction.
 (C) Satyasodhak Samaj was started by Swami Dayanand Saraswati.
 (D) Sardar Sarovar Dam supplies drinking water to Kachchh in Rajasthan.
 (E) None of these

15. Which of the following relates to our fundamental rights?

- (A) Children are going to school.
 (B) Children are saluting our national flag.
 (C) Children are following traffic rules while crossing the streets.
 (D) Children are fighting among themselves.
 (E) None of these

ANSWERS

1. D	2. A	3. C	4. A	5. D	6. B	7. C	8. B
9. D	10. E	11. D	12. A	13. C	14. B	15. A	