

In Aptoinn, **“ WE ARCHITECTS . . MAKE ARCHITECTS . . ”**



NATA , ARCHITECTURE

APTITUDE COACHING CENTRE

pto - inn

“Path of Creativity is the best walkway in to the Future”

www.aptoinn.in

917630 1689 / 98847 22837 / 91765 62187

Nata & J.E.E - B.Arch portions covered

We provide the students with the best coaching for the NATA - B.arch aptitude entrance exam & J.E.E –B.Arch exam. The coaching is taken up by Professors from reputed architecture colleges, practicing architects and eminent artists.

We also guide the students for the NATA Application, NATA study materials, Best Architecture colleges, nata test centres, nata scoring process, scope of architecture, nata exam dates, nata sample question papers, nata syllabus, nata online exam e.t.c.

Course options: One Month/15 days /Week end/One year online course/Study materials

Our Branches: **Chennai** (Tambaram/Saidapet/Anna nagar/Adyar / **Coimbatore** / **Salem**

AESTHETIC SENSITIVITY MODEL PAPER – 4

Note:These questions are the collections of student’s contributions from different forums & websites

NATIONAL APTITUDE TEST IN ARCHITECTURE

PART – A - 40 Questions

MARKS : 100

TIME: Maximum one Hour


NATA SAMPLE TEST QUESTION PAPER - 4

1. Identify the given image below?



- (a) Hagia Sophia
- (b) Sagrada familia
- (c) Guggenheim museum
- (d) Mausoleum 2

2. Find the given architect name?



APTOINN –NATA Architecture Aptitude Entrance coaching centre

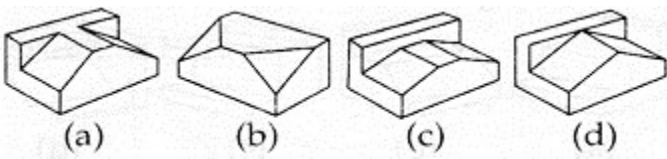
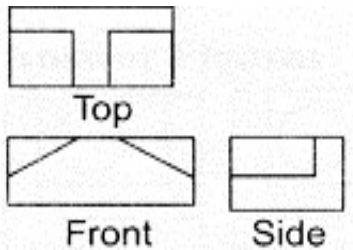
Website: www.aptoinn.in

Ph: 091763 01689 / 098847 22837 /089392 09402 / 091765 62187


E-mail : aptoinninfo@gmail.com

- (a) Ar.Le Corbusier
- (b) Ar.Frank gehry
- (c) Ar.Frank Lloyd Wright
- (d) Ar.Richard Rogers

3. Identify the isometric view of the given figure?



4. Whoes building is this?



- (a) Charles corria
- (b) B.V.Dhoshi
- (c) le Corbusier
- (d) Daniel libeskind

5. Identify the odd one?

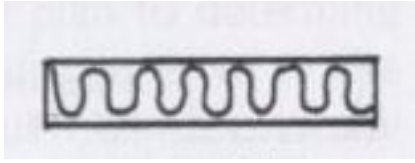
- (a) Red
- (b) Blue
- (c) Green
- (d) Yellow

6. Sagrada familia was designed by

- (a) Antonio Gaudi

- (b) Isidore of Miletus
- (c) James Hoban
- (d) Jorn utzon

7. Find the material for which the symbol belongs



- (a) Glass sheet
- (b) Insulation board
- (c) Block board
- (d) plywood

8. Which one is not a part of a stair case?

- (a) Baluster
- (b) Nosing
- (c) Peak
- (d) Newel

9. Identify the given material?

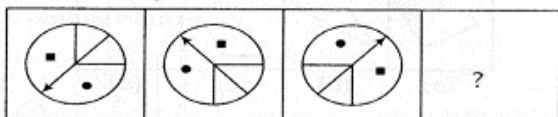


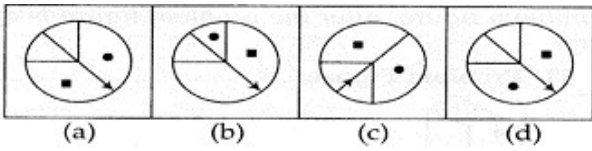
- (a) Sand stone
- (b) Granite
- (c) Marble
- (d) Rock veneers

10. One of the famous building of ar.jorn utzon is

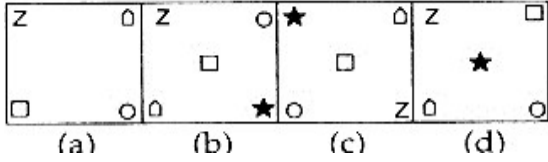
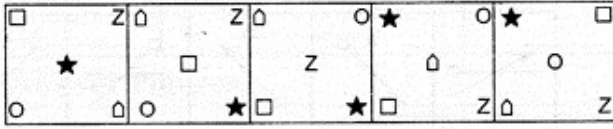
- (a) Petronas tower
- (b) Shard London
- (c) Crystal cathedral
- (d) Sydney opera house

11. What will be the next image?

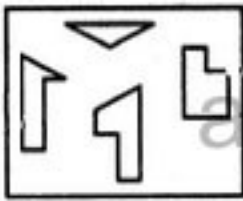




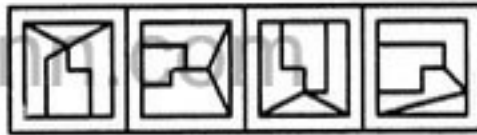
12. What follows next?



13. Find out which of the figures (1), (2), (3) and (4) can be formed from the pieces given in figure (X).




(X)



(1) (2) (3) (4)

- (a) 1.
- (b) 2.
- (c) 3.
- (d) 4.

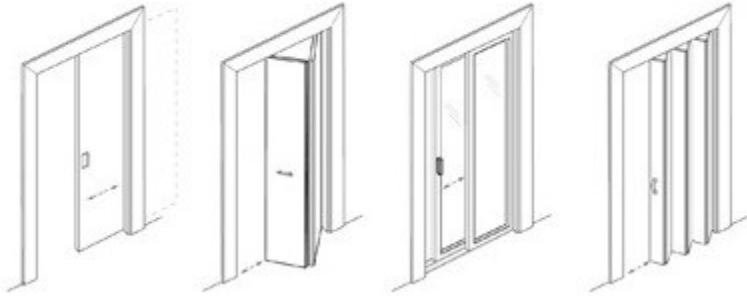
14. Find out the name of dormer given below?



- (a) Shed
- (b) Gabled
- (c) Hipped
- (d) eyebrow

15. Which one is the pocket door among the following?

- (a) (b) (c) (d)



16. Petronas tower located at..

- (a) France
- (b) Malaysia
- (c) Singapore
- (d) Dubai

17. Which one is the tallest building among the following?

- (a) Eiffel tower
- (b) World trade Centre
- (c) Burj khalifa
- (d) Willis tower

18. Fill in the blanks.

North: Kubera, South: Yama, East:, West: Varuna

- (a) Indra
- (b) Brahma
- (c) Vayu
- (d) Agni

19. A brick laid with its short side exposed is known as

- (a) Stretcher
- (b) Header
- (c) Quarter
- (d) Queen closer

20. Identify the given image?



- (a) Villa savovea
- (b) Falling water
- (c) White house
- (d) Apsley house

21. Identify this given building's architect image among the following?



- (a)
- (b)
- (c)
- (d)



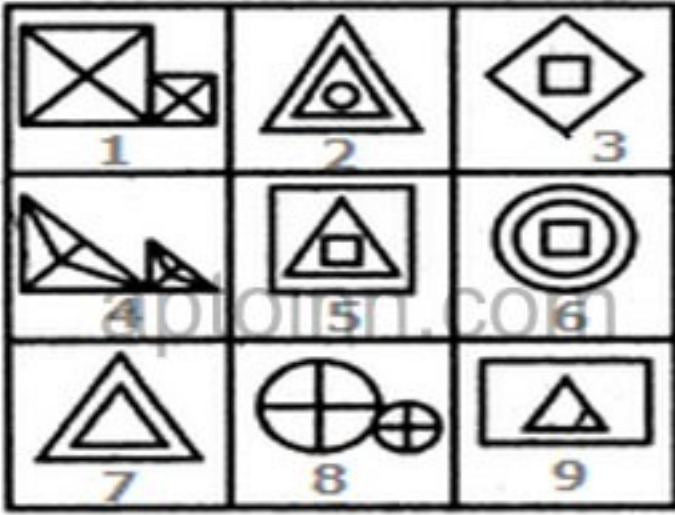
22. Another name of this lake palace in jaipur is

- (a) Hawa mahal
- (b) Jal mahal
- (c) Jantar mantir
- (d) Jai mahal

23. Hussain dhoshi gufa is located at

- (a) Hyderabad
- (b) Mumbai
- (c) Delhi
- (d) Ahmadabad

24. Group the given figures into three classes using each figure only once.

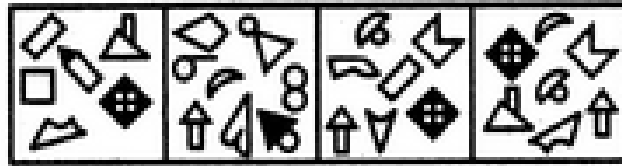


- (a) 1,3,7 ; 2,4,6 ; 5,8,9
- (b) 1,4,6 ; 2,5,7 ; 3,8,9
- (c) 1,4,8 ; 2,5,6 ; 3,7,9
- (d) 1,4,8 ; 2,7,9 ; 3,5,6

25. Select the alternative in which the specified components of the key figure (X) are found.



(X)



(1)

(2)

(3)

(4)

- (a) 1
- (b) 2
- (c) 3
- (d) 4

26. Where is the given building located?



- (a) Maharashtra

- (b) Rajasthan
- (c) Delhi
- (d) Madhya Pradesh

27. Photography changed dramatically ____ introduced instant pictures.

- (a) When was
- (b) Polaroid
- (c) When Polaroid
- (d) It when Polaroid

28. The manager was ____ the number of guests

- (a) Counted
- (b) Counts
- (c) Counting
- (d) Count

29. ____ does your father work at that company? Because it's near our house?

- (a) Why
- (b) When
- (c) What
- (d) Where

30. How does your favorite TV channel in your country contrast ____ BBC1?

- (a) With
- (b) For
- (c) Against
- (d) to

31. Are you puzzled ____ the meaning of life and the complexity of the universe?

- (a) On
- (b) For
- (c) About
- (d) From

32. Xavier Philippe will often spend his evenings ____ upside-down from the ceiling in his room.

- (a) Hanging
- (b) That are
- (c) Which hanging
- (d) Hang

33. The given image shows an example of -----architecture.




- (a) Organic
- (b) Vernacular
- (c) Renaissance
- (d) Modern

34. Filippo Brunelleschi is not known for -----

- (a) Architecture
- (b) Sculpture
- (c) Writing
- (d) Mechanical engineering

35. Identify the type of perspective view?



- (a) One point perspective
- (b) Two point perspective
- (c) Three point perspective
- (d) None of these

36. Tickets numbered 1 to 20 are mixed up and then a ticket is drawn at random. What is the probability that the ticket drawn has a number which is a multiple of 3 or 5?

- (a) $\frac{1}{2}$
- (b) $\frac{2}{5}$
- (c) $\frac{8}{15}$

(d) 9/20

37. Which one of the following is not a prime number?

(a) 31

(b) 61

(c) 71

(d) 91

38. The largest 4 digit number exactly divisible by 88 is:

(a) 9944

(b) 9768

(c) 9988

(d) 8888

39. In the first 10 overs of a cricket game, the run rate was only 3.2. What should be the run rate in the remaining 40 overs to reach the target of 282 runs?

(a) 6.25

(b) 6.5

(c) 6.75

(d) 7

40. The sum of ages of 5 children born at the intervals of 3 years each is 50 years. What is the age of the youngest child?

(a) 8 years

(b) 10 years

(c) None of these

(d) 4 years

ANSWERS TEST – 4

1	A	5	C	9	A	13	C	17	C	21	C	25	D	29	A	33	B	37	D
2	C	6	A	10	D	14	B	18	A	22	B	26	B	30	A	34	C	38	A
3	A	7	B	11	A	15	A	19	B	23	D	27	C	31	C	35	C	39	A
4	B	8	C	12	D	16	B	20	A	24	C	28	C	32	A	36	D	40	D

APTOINN NATA study materials:

- **10 days** Consolidated NATA EXAM Preparation Material
- 01 month NATA -**CRASH COURSE** Preparation materials
- 100 days NATA - **TARGET COURSE** Preparation materials
- 06 months NATA - **ORIENTATION COURSE** Preparation materials.
- 01 year NATA - **EXPERTISE COURSE** Preparation materials.
- 02 years NATA- **MASTER** Preparation materials.

Which is the best package for me? What is the rate of the packages? How can I purchase them from aptoinn? : Visit www.aptoinn.com to know get answers to all your questions.

Online Mock test

Package	Package Description	Rate
BEGINNER PACK	03 NATA ONLINE MOCK TEST + 01 NATA SKETCHING SAMPLE PAPER - Rs.700.	Rs.700
LEARNER PACK	07 NATA ONLINE MOCK TEST + 03 NATA SKETCHING SAMPLE PAPERS - Rs.1500.	Rs.1500
DRILL PACK	15 NATA ONLINE MOCK TEST + 07 NATA SKETCHING SAMPLE PAPERS1 - Rs.2700.	Rs.2700
HIGH SCORE PACK	25 NATA ONLINE MOCK TEST + 12 NATA SKETCHING SAMPLE PAPERS - Rs.4100.	Rs.4100
BRILLIANT PACK	12 NATA ONLINE MOCK TEST + 05 NATA DRAWING SAMPLE PAPERS + ACCESS TO APTOINN ONLINE NATA PREPERATION LIBRARY - Rs.12000.	Rs.12000
SKETCH PACK	09 NATA SAMPLE SKETCHING QUESTIONS WITH DETAILED EVALUATION & MARKINGS. - Rs.999.	Rs.999

What is the rate of the packages? How can I attend these tests?

: Visit www.aptoinn.in to know get answers to all your questions.

Also, Attend the Free Online Mock test provided by Aptoinn to know better about the NATA online Exam pattern.

www.aptoinn.com