


HALL TICKET NO:



ST. ANTHONY'S COLLEGE, SHILLONG

**ENTRANCE TEST FOR ADMISSION INTO
GRADUATE PROFESSIONAL COURSES
2006**

MASS COMMUNICATION AND VIDEO PRODUCTION

DATE : 11 May 2006
TIME : 1.00 pm - 3.00 pm
DURATION : 2 hours

INSTRUCTIONS

- ◆ All the questions in this test are to be answered on the question paper itself.
- ◆ Make sure that you have entered the hall ticket number properly in the place provided above. Enter only the hall ticket number of Mass Communication & Video Production.
- ◆ Please preserve your hall tickets. They will be required at the time of admission.
- ◆ The hall ticket numbers of those shortlisted for admission on the basis of the entrance test will be published on the college notice boards and on the college web site on 15 May, 2006. The final admission will be done on a first come, first served basis, after the marksheets of the Class XII examinations of the Meghalaya Board of School Education are available, provided the eligibility criteria as laid down in the prospectus are fulfilled.

SECTION I

A Give one word answers for these questions. Write your answers in the space provided after each question. (Any ten) (1 x 10 = 10)

1. Name the capital of Sikkim.
2. Which film won the Oscar for the best film in 2005.
3. What are the people from the plains of Manipur called?
4. Name a famous dance of Mizoram.
5. Name the Chief Minister of Nagaland.
6. Name a TV Channel music hero from the North Eastern region?
7. Name the Union Minister for DoNER.
8. Where is the Headquarters of American Defense Forces situated?
9. What is the national council looking after the North East Region?
10. Name the uranium ore Mill in Bihar.
11. Give the full form of the acronym ASAP.
12. Name a famous singer of Assam.

B Analyse any two of the following in 5 to 7 lines. Use the space below.

(5 x 2 = 10)

1. Impact of Hindi soaps in India
2. Film industry in the North Eastern region
3. Cricket and branding
4. Bollywood - ambassadors of HIV-AIDS

C Choose the correct answers from the following and write the answers in the box provided. (any 10) (1x10=10)

- | | | |
|---|-----------------------|--------------------------|
| 1. The director of the film Titanic is | | <input type="checkbox"/> |
| a) Kuro Sawa | b) Tom Hanks | |
| c) James Cameroon | d) Mel Gibson | |
| 2. The film 'Sixth Sense' is directed by | | <input type="checkbox"/> |
| a) Mira Nair | b) Nassiruddin Shah | |
| c) M N Shyamalan | d) Gurunder Chader | |
| 3. The largest film city in India is located in | | <input type="checkbox"/> |
| a) Mumbai | b) Hyderabad | |
| c) Kolkata | d) Chennai | |
| 4. Mr. and Mrs. Iyer is a film which discusses | | <input type="checkbox"/> |
| a) Health | b) Indo-Pak relations | |
| c) Communalism | d) Kashmir | |
| 5. A famous war cemetery is located in | | <input type="checkbox"/> |
| a) Aizawl | b) Churachandpur | |
| c) Tezpur | d) Kohima | |
| 6. The Loktak Lake is situated in the state of | | <input type="checkbox"/> |
| a) Mizoram | b) Manipur | |
| c) Sikkim | d) Arunachal Pradesh | |
| 7. The Brindavan Gardens are located in | | <input type="checkbox"/> |
| a) Mysore | b) Nilgris | |
| c) Mussorie | d) Shimla | |
| 8. Bhaichung Bhutia is famous for | | <input type="checkbox"/> |
| a) Table Tennis | b) Swimming | |
| c) Hockey | d) Football | |
| 9. The 'Chirau' dance is linked to | | <input type="checkbox"/> |
| a) Drum | b) Bamboo | |
| c) Flute | d) Sitar | |
| 10. The author of The God of Small Things is | | <input type="checkbox"/> |
| a) Dimple Kapadia | b) Medha Patkar | |
| c) Arundhati Roy | d) Burkha Dutt | |

D Match the following by writing the alphabet corresponding to the correct answer in the brackets provided. (1x10 = 10)

- | | | |
|----------------|--------------------------|---------------------------|
| Tollywood | <input type="checkbox"/> | a) Photographer |
| Oscar | <input type="checkbox"/> | b) Journalist |
| Mahesh Bhatt | <input type="checkbox"/> | c) Narmada Bachao Andolan |
| Kushwant Singh | <input type="checkbox"/> | d) Musician |
| Bismilla Khan | <input type="checkbox"/> | e) Talk Show |
| Prannoy Roy | <input type="checkbox"/> | f) Kasauti Zindagi Ki |
| Medha Patkar | <input type="checkbox"/> | g) Film Award |
| Raghu Rai | <input type="checkbox"/> | h) Film Director |
| Ekta Kapoor | <input type="checkbox"/> | i) NDTV |
| Simi Garewal | <input type="checkbox"/> | j) Kolkata |

SECTION II

A *Insert suitable articles where necessary and rewrite the corrected sentences in the space provided below each sentence:* (1 x 5 = 5)

1. You must take care.
2. I like to live in open air.
3. The musician was old Mussalman.
4. Who wishes to take walk with me.
5. Time makes worst enemies friends.

B *Correct the following sentences (if required) and write the corrected sentences in the space provided below each sentence.* (1 x 5 = 5)

1. Who did you ask to the party?
2. Laura had no desire nor need of Sam's approval.
3. A series of lectures were given by Mr. Olsen.
4. I haven't no money left.
5. You are as good player as I am.

C *Construct sentences using the following idioms and write your sentences in the space given below* (1x 5 = 5)

1. losing ground
2. no love lost

3. gall and wormwood

4. tooth and nail

5. the ins and outs

D Write a three paragraph report on any one of the following situations for a television news text. Use the space given below. (15)

a) An earthquake has just hit Assam: its aftermath

b) The First All India Folk Dance Competition held in Shillong

SECTION III

1. These six gentlemen from different parts of the world are searching for their own animals. Identify the animal and write the number of the animal against the letter representing the gentleman. (10)



A

B

C

D

E



F

2. Each of these men have lost three articles each. Identify the three articles and write their numbers against the letter representing each person. (10)



A	<input type="checkbox"/>	<input type="checkbox"/>	<input type="checkbox"/>
B	<input type="checkbox"/>	<input type="checkbox"/>	<input type="checkbox"/>
C	<input type="checkbox"/>	<input type="checkbox"/>	<input type="checkbox"/>
D	<input type="checkbox"/>	<input type="checkbox"/>	<input type="checkbox"/>
E	<input type="checkbox"/>	<input type="checkbox"/>	<input type="checkbox"/>

3. a) Give suitable captions for each of the following pictures in the space below each picture. (5)



b) Write a paragraph on the role of religion in promoting peace.

(5)